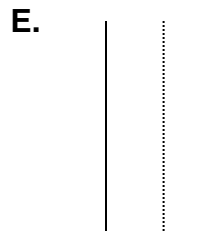
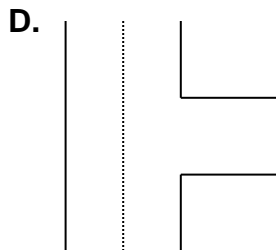
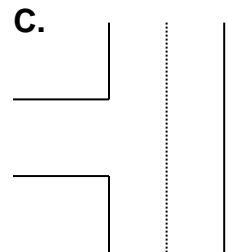
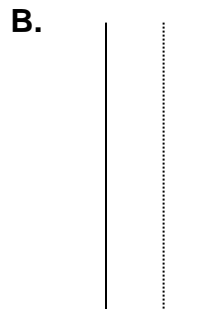
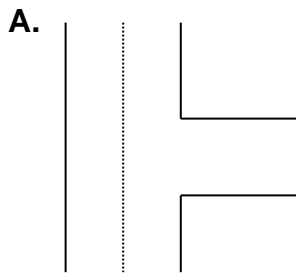


CHAPTER 6 REVIEW

1. Some new drivers tend to turn the wheel too much – this is called:
_____.
2. Give proper steps for making a lane change.
3. A maneuver for turning your car around to go in the opposite direction is called:
_____?
4. Using numbered cars & arrows diagram the five turnabouts.



- OVER -

Chapter 6 Review.....continued

5. What clue do you look for to turn wheels sharply right when pulling into an angle parking space?


6. What clue do you use to pull into a perpendicular parking space? (use little cars & diagram if needed)

7. Show which way wheels should be turned.

UPHILL




With Curb




Without Curb

DOWNHILL



With Curb



Without Curb